

NET EXPLANATIONS

ONLINE EXAM STUDY MATERIAL

Worksheet 3


Name _____

Std. _____ , Sec. _____

Roll No. _____

3) Write the name of the object and identify its shape


a)



Name of the object -----

Shape of the object-----


b)



Name of the object -----

Shape of the object-----

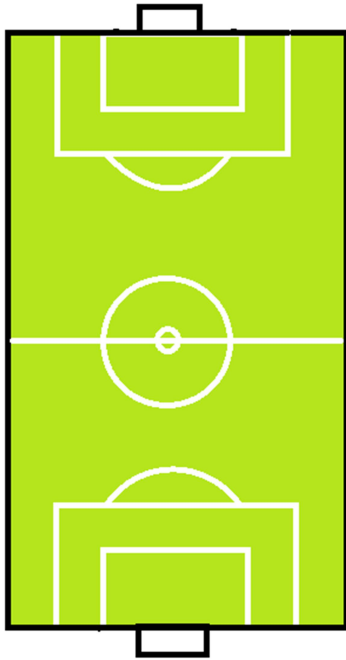
c)



Name of the object -----

Shape of the object-----

d)



Name of the object -----

Shape of the object-----

