

# NET EXPLANATIONS

## ONLINE EXAM STUDY MATERIAL

### Worksheet 3


Name \_\_\_\_\_

Std. \_\_\_\_\_, Sec. \_\_\_\_\_

Roll No. \_\_\_\_\_


3) Count the shapes and solve the given problem.  
Write down the answer in given blank space.

a)



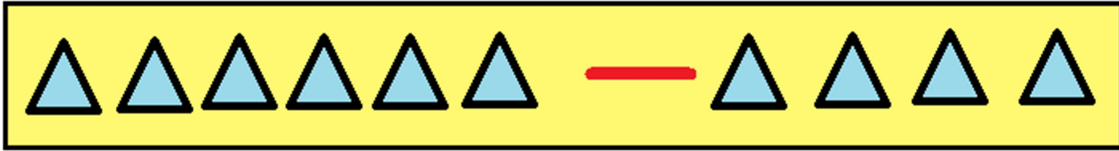
=

b)



=

c)



d)



e)

