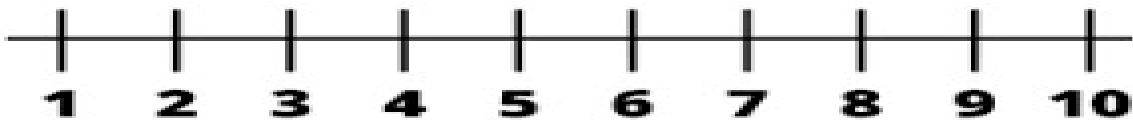


Exercise 1

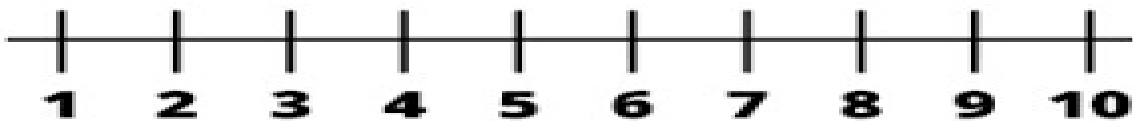
Mark 10 (3+3+4)

**Number Line**



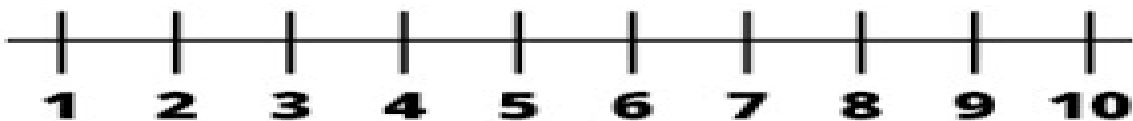
**Locate number 3 in number line**

**Number Line**



**Locate number 5 in number line**

**Number Line**



**Locate number 1 in number line**